

Name _____

Eastern North Central States

1. Write the name of each state, city, body of water, or mountain range in its correct location on the map below. Use colored pencils.

RED

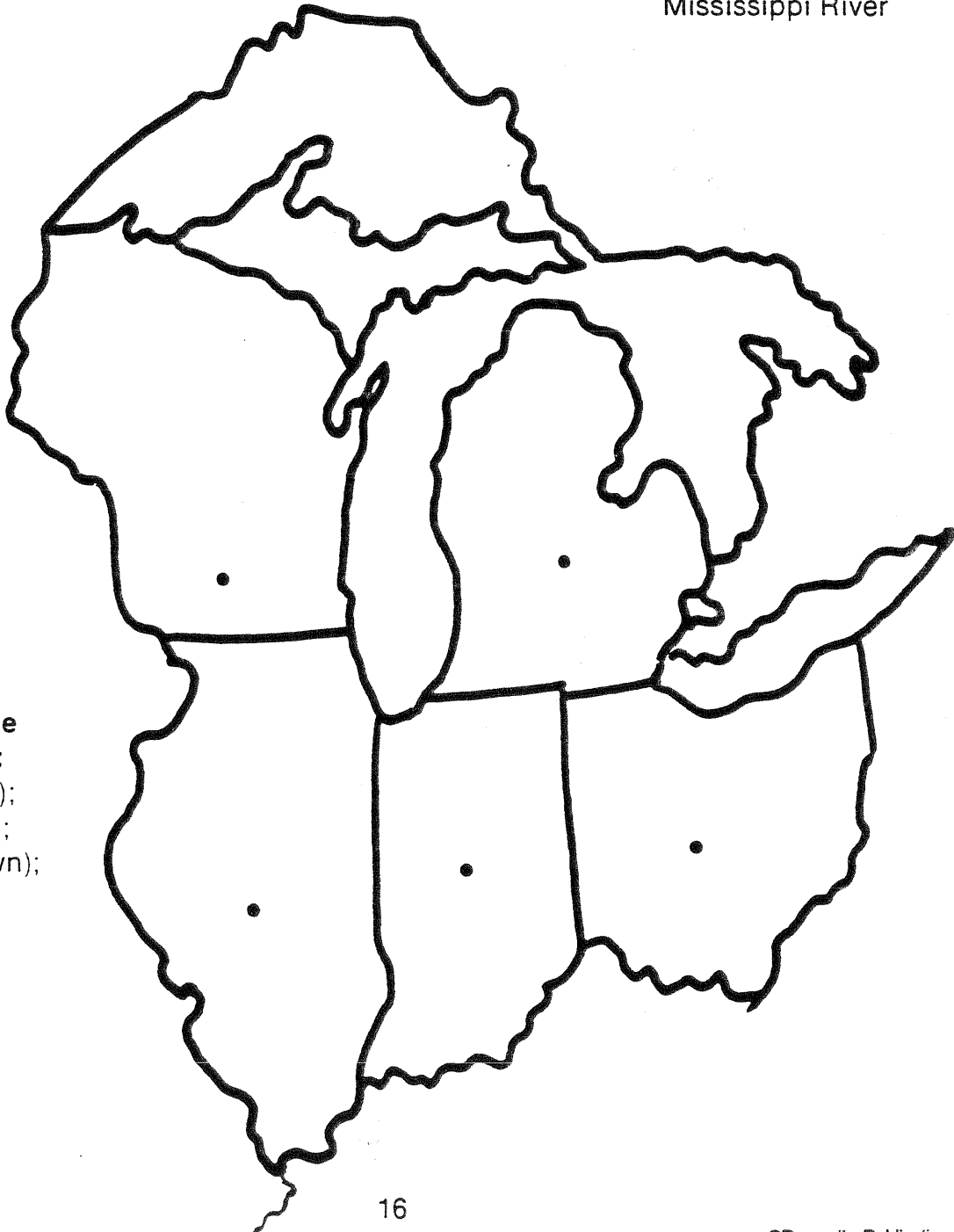
Wisconsin
Michigan
Ohio
Indiana
Illinois

GREEN

Lansing
Springfield
Madison
Columbus
Indianapolis

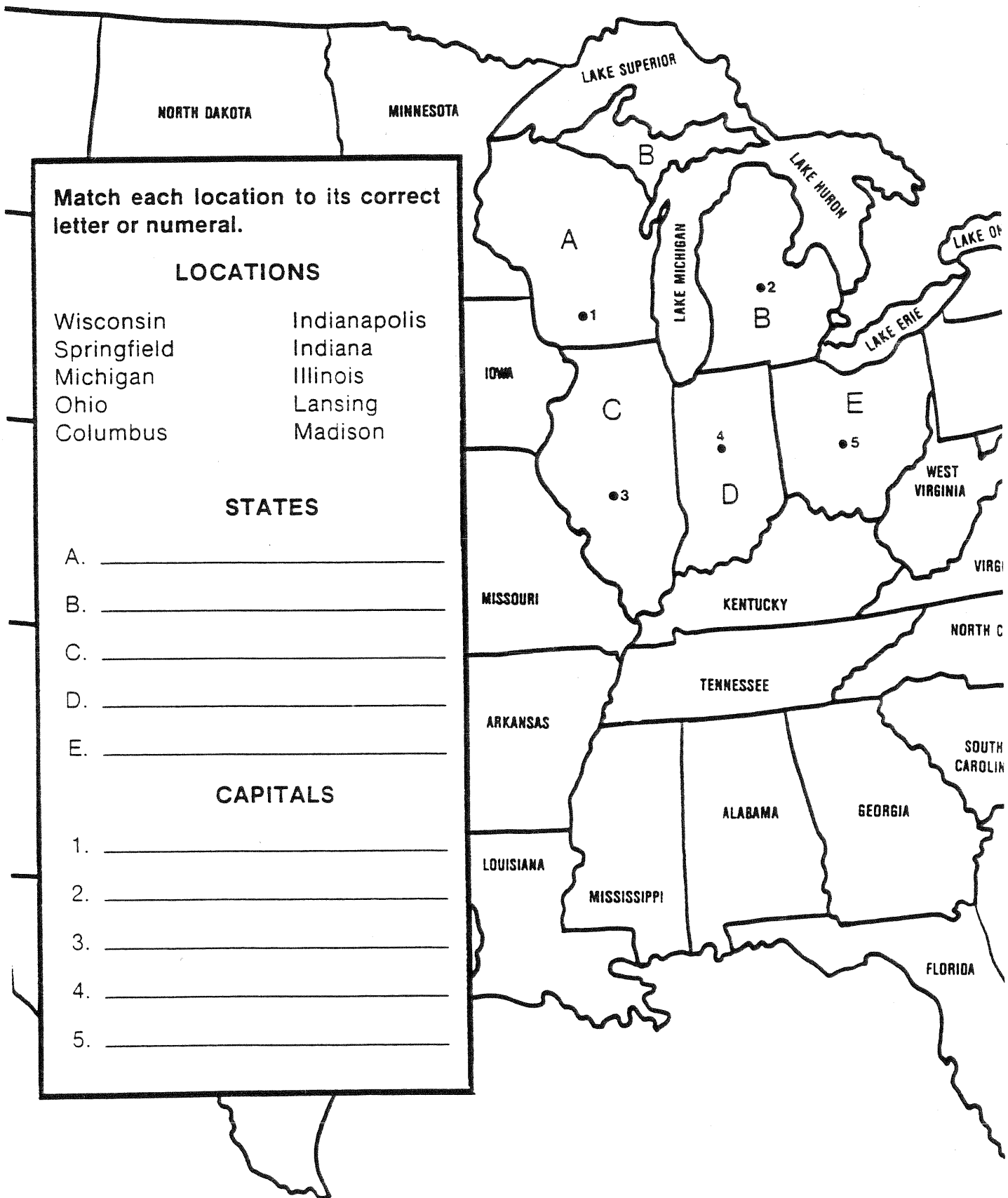
BLACK

Lake Superior
Lake Michigan
Lake Huron
Lake Erie
Ohio River
Mississippi River



2. With colored pencils, shade in each state:
Ohio (yellow);
Illinois (blue);
Indiana (brown);
Wisconsin (purple);
Michigan (green).

Eastern North Central States



Match each location to its correct letter or numeral.

LOCATIONS

- | | |
|-------------|--------------|
| Wisconsin | Indianapolis |
| Springfield | Indiana |
| Michigan | Illinois |
| Ohio | Lansing |
| Columbus | Madison |

STATES

- A. _____
- B. _____
- C. _____
- D. _____
- E. _____

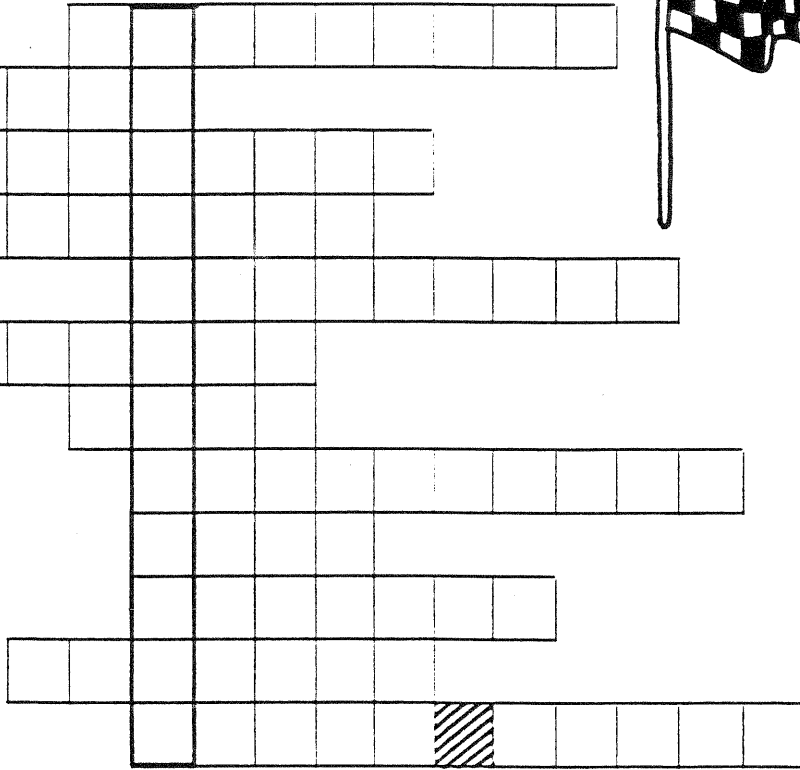


CAPITALS

1. _____
2. _____
3. _____
4. _____
5. _____

Name _____

Eastern North Central States

Complete this puzzle with answers to the questions below.



1. I am the state located north of Illinois. What state am I?
2. I am the capital of Wisconsin. What is my name?
3. I am the state located east of Illinois. What state am I?
4. I am the capital of Illinois. What is my name?
5. I am an astronaut. My first name is Neil. What is my last name?
6. I am the bridge which joins the Upper and Lower Peninsulas of Michigan. What is my name?
7. I am a famous steel city in Indiana. What is my name?
8. The Macinack Bridge connects my two parts. What are my parts called?
9. I am the birthplace of John Glenn. What state am I?
10. I am the capital of Michigan. What is my name?
11. I am a city in Illinois that was almost destroyed by fire. What is my name?
12. I am the world's tallest building. What is my name?

What speedway is located in Indiana? (letters in the vertical box on the puzzle spell the answer.)

Name _____

Eastern North Central States

Michigan is made up of two peninsulas called the Upper Peninsula and the Lower Peninsula. They are joined by the beautiful Mackinac Bridge. Most of the auto industry of the United States is located in Detroit. Michigan borders four of the Great Lakes.

Wisconsin is a state that is popular for its dairy products. This state, which has about 15,000 lakes, is a popular vacation spot. Wisconsin is also a leading producer of paper.

Indiana is the home of the famous Indianapolis Speedway. Johnny Appleseed planted many apple trees in Indiana. Gary is a famous steel city. People from Indiana are called "Hoosiers."




Ohio is a leading industrial state. Auto parts and machinery are produced there. Seven United States Presidents were born in Ohio. Astronauts John Glenn and Neil Armstrong were born in Ohio.

Illinois has the world's busiest airport, O'Hare International in Chicago. The world's tallest building, the Sears Tower, is also in Chicago. This city was almost destroyed by fire in 1871 when Mrs. O'Leary's cow kicked over a lantern. Abraham Lincoln lived in Illinois.

What did you learn?

1. Johnny Appleseed was busy planting trees in _____ .
2. _____ is the leading dairy state.
3. The tallest building in the world is the _____
located in Chicago, _____ .
4. Seven U.S. Presidents were born in _____ .
5. The U.S. auto industry is centered in _____ , Michigan.
6. The Indianapolis Speedway is located in _____ .
7. The world's busiest airport is _____
located in _____ , Illinois.
8. Michigan's two peninsulas are joined by the _____
_____ .
9. Abraham Lincoln lived in _____ .
10. John Glenn, a famous _____ , was from Ohio.
11. People from Indiana are called " _____ ."
12. _____ has about 15,000 lakes.

Eastern North Central States



ACROSS CLUES:

1. capital of Indiana
4. river forming western boundary of Illinois
5. state between Ohio and Illinois
9. Great Lake north of Wisconsin
11. capital of Ohio
12. Lake Huron is northeast of this state.
13. Great Lake between Wisconsin and Michigan

DOWN CLUES:

1. state south of Wisconsin
2. capital of Illinois
3. capital of Wisconsin
6. Great Lake north of Ohio
7. state north of Illinois
8. capital of Michigan
10. state east of Indiana